
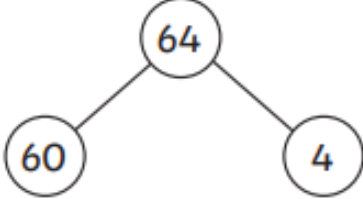
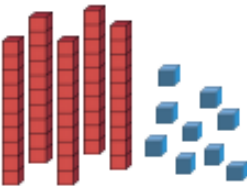
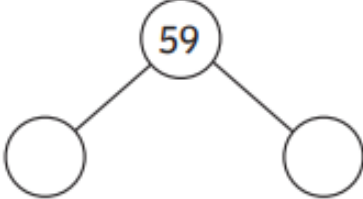
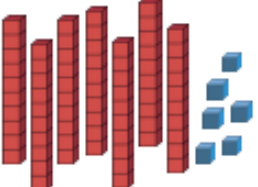
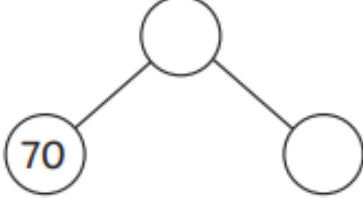
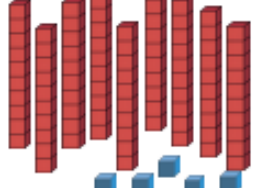
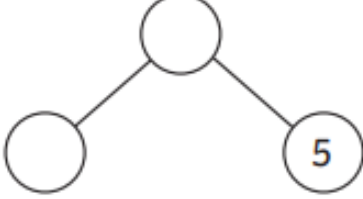
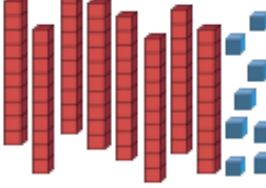
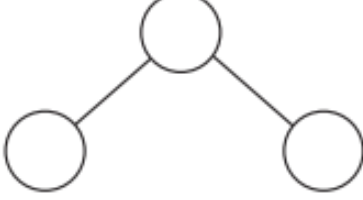
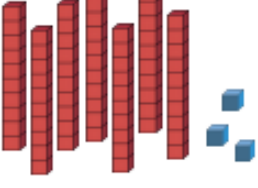
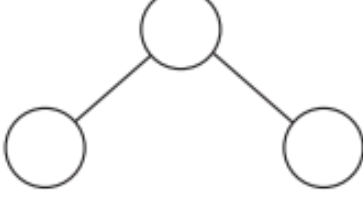


Bronze Homework

1. Count and identify the number represented.
2. Partition the number into 10s and 1s using the part-whole model
3. Complete the sentences.

Make	Count	Part-Whole Model	Complete
	64		<p>There are 6 tens.</p> <p>There are 4 ones.</p>
			<p>There are ___ tens.</p> <p>There are ___ ones.</p>
			<p>There are ___ tens.</p> <p>There are ___ ones.</p>
			<p>There are ___ tens.</p> <p>There are ___ ones.</p>
			<p>There are ___ tens.</p> <p>There are ___ ones.</p>
			<p>There are ___ tens.</p> <p>There are ___ ones.</p>