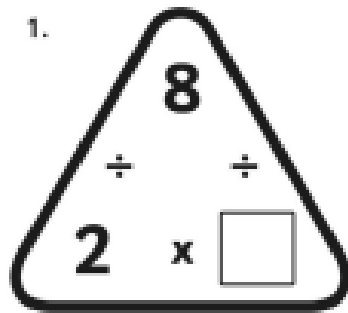
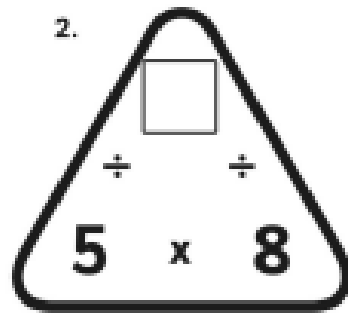
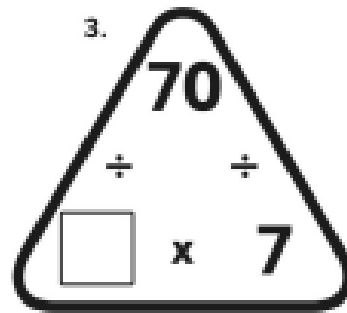


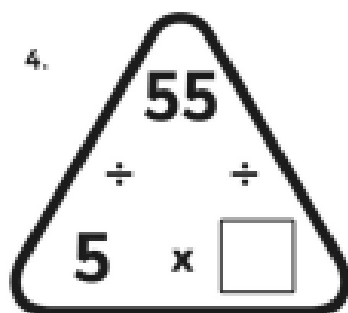
# Multiplication Triangles

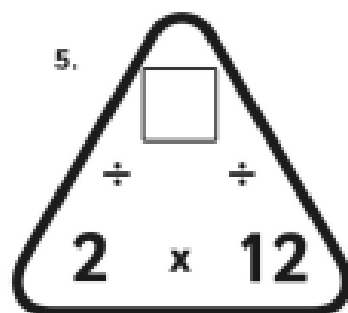
Fill in the blanks in these multiplication triangles.

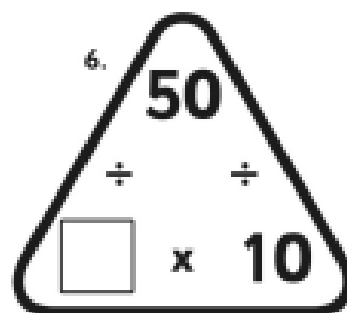
1.   $8$   
 $\div$   $\div$   
 $2 \times \square$

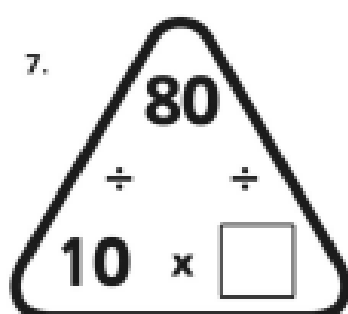
2.   $\square$   
 $\div$   $\div$   
 $5 \times 8$

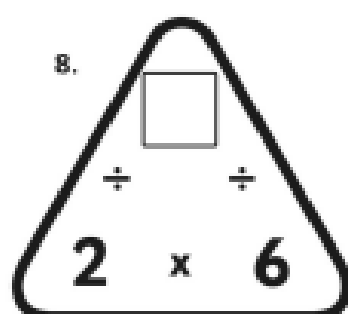
3.   $70$   
 $\div$   $\div$   
 $\square \times 7$

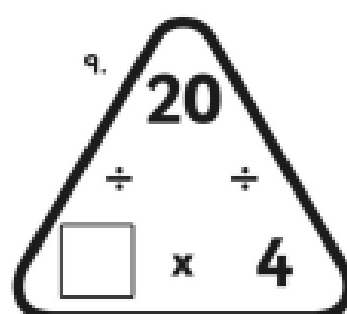
4.   $55$   
 $\div$   $\div$   
 $5 \times \square$


5.   $\square$   
 $\div$   $\div$   
 $2 \times 12$

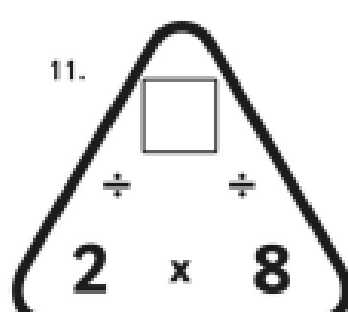
6.   $50$   
 $\div$   $\div$   
 $\square \times 10$

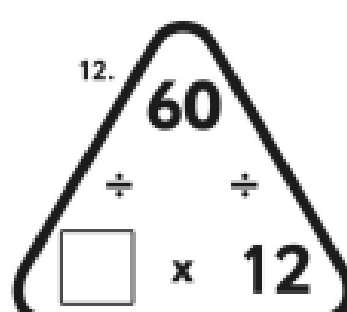
7.   $80$   
 $\div$   $\div$   
 $10 \times \square$

8.   $\square$   
 $\div$   $\div$   
 $2 \times 6$

9.   $20$   
 $\div$   $\div$   
 $\square \times 4$

10.   $10$   
 $\div$   $\div$   
 $5 \times \square$

11.   $\square$   
 $\div$   $\div$   
 $2 \times 8$

12.   $60$   
 $\div$   $\div$   
 $\square \times 12$